

CANDIDATE
NAME

--

CENTRE
NUMBER

--	--	--	--	--

CANDIDATE
NUMBER

--	--	--	--

MARINE SCIENCE

9693/13

Paper 1 AS Structured Questions

May/June 2018

1 hour 30 minutes

Candidates answer on the Question Paper.

No Additional Materials are required.

READ THESE INSTRUCTIONS FIRST

Write your Centre number, candidate number and name on all the work you hand in.

Write in dark blue or black pen.

You may use an HB pencil for any diagrams or graphs.

Do not use staples, paper clips, glue or correction fluid.

DO **NOT** WRITE IN ANY BARCODES.

Answer **all** questions.

Write your answers in the spaces provided on the Question Paper.

Electronic calculators may be used.

You may lose marks if you do not show your working or if you do not use appropriate units.

At the end of the examination, fasten all your work securely together.

The number of marks is given in brackets [] at the end of each question or part question.

This document consists of **14** printed pages and **2** blank pages.

- 1 Fig. 1.1 shows a black smoker on the sea bed. Black smokers are a type of hydrothermal vent often populated by tube worms.




Fig. 1.1

- (a) State **two** features of hydrothermal vents that classify them as extreme environments.

1

2

[2]

- (b) (i) Explain why the water leaving hydrothermal vents is rich in minerals.

.....
.....
.....
..... [2]

- (ii) Some minerals provide nutrients for marine organisms.

For each of the following, suggest **one** use for organisms living near hydrothermal vents.

phosphorus

.....

calcium

.....

[2]

(c) Describe the processes involved in hydrothermal vent formation.

.....
.....
.....
.....
.....
.....
.....[3]

(d) With reference to the tube worms found at hydrothermal vents, explain the meanings of the following ecological terms.

(i) *mutualism*
.....
.....
.....
.....
.....[3]

(ii) *succession*
.....
.....
.....
.....
.....[3]

[Total: 15]

2 Fig. 2.1 shows the stages involved in the formation of an atoll, according to the Darwin-Dana-Daly theory.

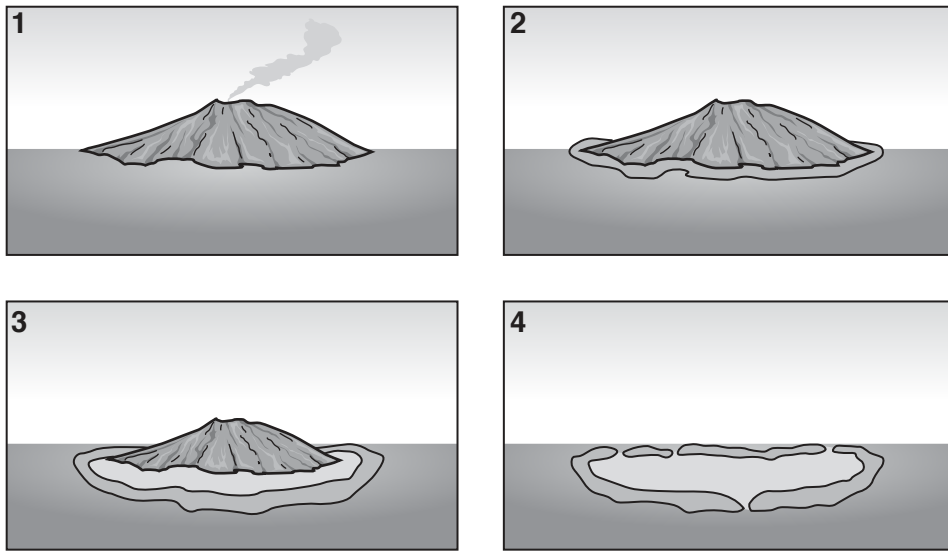


Fig. 2.1

(a) Describe the events occurring at stages 1–4 in Fig. 2.1.

1	<p>.....</p> <p>.....</p> <p>.....</p>
2	<p>.....</p> <p>.....</p> <p>.....</p>
3	<p>.....</p> <p>.....</p> <p>.....</p>
4	<p>.....</p> <p>.....</p> <p>.....</p>

[4]

(b) The Darwin-Dana-Daly theory relates the distribution of tropical coral to its physiology.

Describe the conditions that allow for successful growth of coral reefs.

.....
.....
.....
.....
.....
.....
..... [3]

(c) State **two** factors that can lead to transition from the growth of a coral reef to its erosion.

1
.....
2
..... [2]

(d) State **two** techniques that could be used to help reconstruct the history of a coral reef.

1
.....
2
..... [2]

[Total: 11]

- 3 Fig. 3.1 shows the total energy in each trophic level in a marine food chain in one year. The figures are given in arbitrary units.

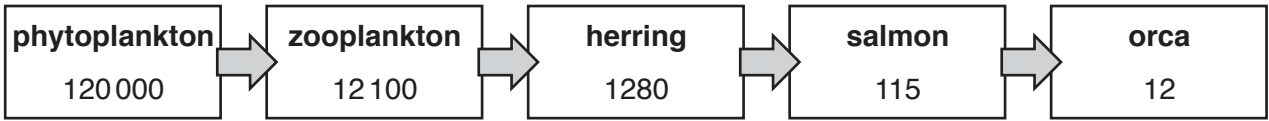


Fig. 3.1

- (a) Explain why phytoplankton can be described as producers for this food chain.

.....

[2]

- (b) Use the information in Fig. 3.1 to calculate the percentage energy loss between zooplankton and herring.

Show your working.

.....%
 [2]

- (c) Suggest reasons for the loss of energy that occurs between zooplankton and herring in this food chain.

.....

[3]

- 4 Fig. 4.1 shows the typical movement of air between the Indian Ocean and the Asian continent in July.

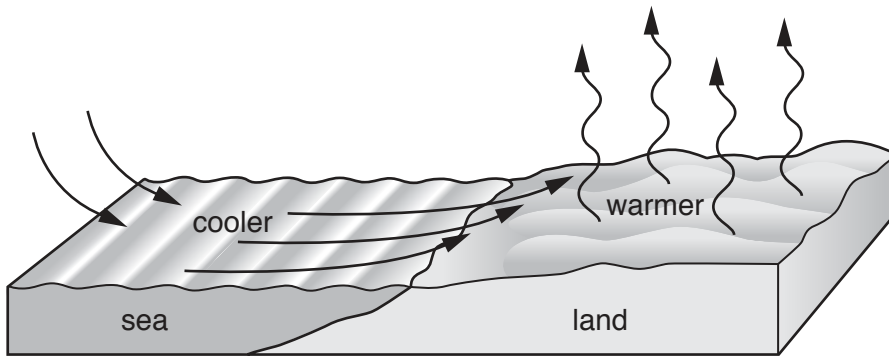


Fig. 4.1

(a) What name is given to winds generated between the Indian Ocean and the Asian continent?
.....[1]

(b) With reference to Fig. 4.1, explain how the wind in July is generated.
.....
.....
.....
.....
.....
.....
.....
.....[3]

(c) Explain how the wind pattern would be different in the cooler month of November.
.....
.....
.....
.....[2]

[Total: 6]

- 5 *Ulva intestinalis*, *Fucus vesiculosus* and *Laminaria digitata* are three species of seaweed commonly found around the coasts of Northern Europe. Table 5.1 provides information about each species. The diagrams are not drawn to scale.

Table 5.1


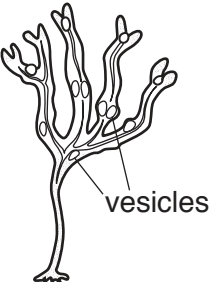
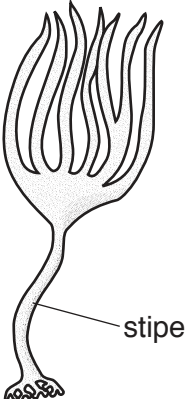
species	<i>U. intestinalis</i>	<i>F. vesiculosus</i>	<i>L. digitata</i>
description	A green thread-like alga, typically 10–30 cm in length.	A brown alga, typically 50 cm to 2 m in length. Air-filled vesicles on fronds.	A brown alga, with long stipe (stalk) and fronds that may exceed 2 m in length.
			

Fig. 5.1 shows the distribution of these algae within the littoral zone on a rocky shore. The taller the shaded area the greater the coverage by each species.

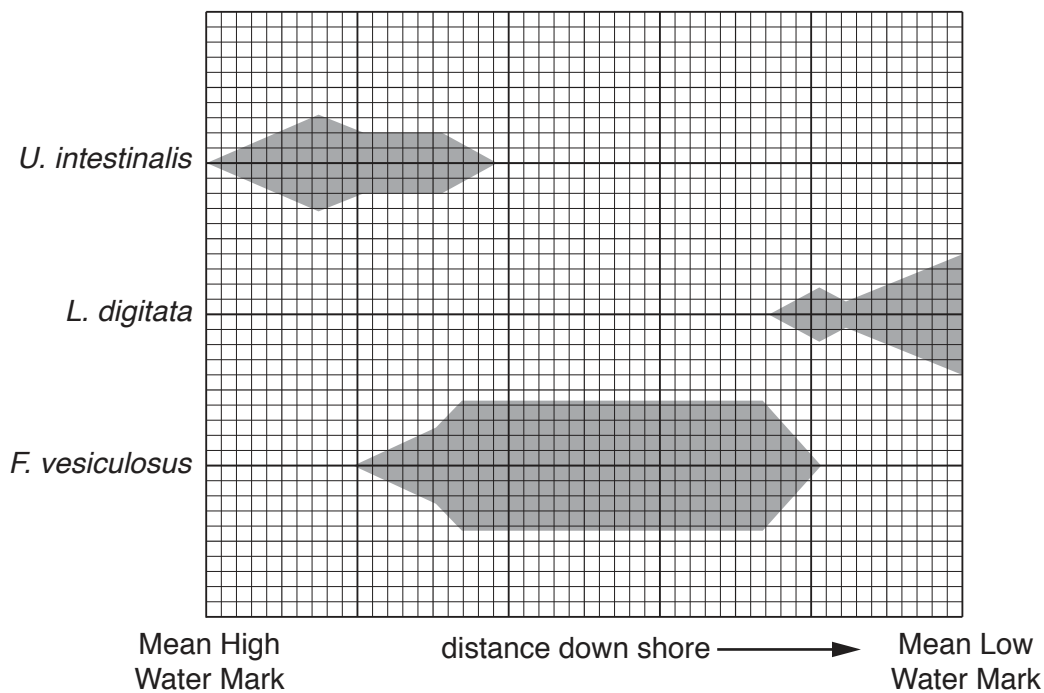


Fig. 5.1

(a) Outline the distribution of each species of alga shown in Fig. 5.1. Use Table 5.1 to help suggest reasons for this distribution.

(i) *U. intestinalis*

.....
.....
.....
.....[2]

(ii) *F. vesiculosus*

.....
.....
.....
.....[2]

(iii) *L. digitata*

.....
.....
.....
.....[2]

(c) Explain the effect of evaporation on the salinity of a shallow rock pool.

.....

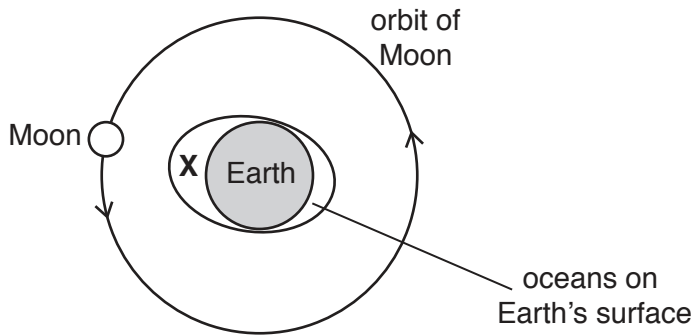
.....

.....

..... [2]

[Total: 14]

6 Fig. 6.1 provides information on the influence of the Moon on ocean tides.



not to scale

Fig. 6.1

(a) (i) Suggest the state of the tide on the Earth's surface at point X.

.....[1]

(ii) Explain how the Moon influences the tidal cycle on Earth during one day.

.....

[3]

(b) Explain how the influence of the Sun also affects the tidal cycle on Earth.

.....

[2]

(c) List **three** factors, other than the Sun and Moon, that influence the tidal range.

- 1
- 2
- 3

[3]

[Total: 9]

7 There are numerous parasites of fish.

(a) Define the term *parasite*.

.....

 [2]

(b) Fig. 7.1 shows the life cycle of one parasite of fish, the fish eye fluke. This parasite has several hosts and completes its life cycle in the intestines of a fish-eating bird.

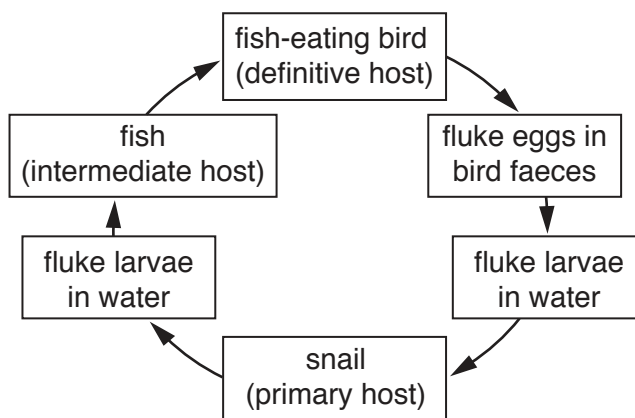


Fig. 7.1

(i) The presence of flukes in fish can lead to reduced vision or even blindness.

Suggest how this may be of benefit to the parasite.

.....

 [3]

(ii) Most parasites do not kill their host. With reference to Fig. 7.1, suggest why doing so would be a disadvantage to the fish eye fluke.

.....

 [2]

[Total: 7]

BLANK PAGE

Permission to reproduce items where third-party owned material protected by copyright is included has been sought and cleared where possible. Every reasonable effort has been made by the publisher (UCLES) to trace copyright holders, but if any items requiring clearance have unwittingly been included, the publisher will be pleased to make amends at the earliest possible opportunity.

To avoid the issue of disclosure of answer-related information to candidates, all copyright acknowledgements are reproduced online in the Cambridge International Examinations Copyright Acknowledgements Booklet. This is produced for each series of examinations and is freely available to download at www.cie.org.uk after the live examination series.

Cambridge International Examinations is part of the Cambridge Assessment Group. Cambridge Assessment is the brand name of University of Cambridge Local Examinations Syndicate (UCLES), which is itself a department of the University of Cambridge.